




Remember to **READ EVERY NIGHT!** Practice your reading goal.

Week	English	Spelling	Mathematics	Science	
2	<b>Grammar</b> Read the sentence and correct the grammar so it makes sense. <i>I found my kitten hide under the kitchen table.</i>	<b>Usual Past tense</b> saw        fed lost        felt swam       paid wore        kept broke      chose	Write the present tense of the spelling words e.g. Past – saw, present – see	Number the snakes from largest (1) to smallest (4). 	Circle the hot items. 
3	Write a <b>verb</b> to complete the procedure sentences: 1. _____ the ingredients together. 2. _____ the cake in the oven. 3. _____ the oil from the tuna.	<b>Unusual Past Tense</b> froze        knew said         thought began        taught heard        bought found        brought	<b>Consonants and vowels</b> Choose 5 words of your choice. For each word, write the C or V above each letter C – consonant, V – vowel	Order the mass of these objects from heaviest to lightest. 	Suggest 5 ways to keep hot on a snowy day.
4	Create nouns groups for the following nouns. 1. hair 2. dog 3. recipe	<b>Plurals</b> leaves        thieves berries tomatoes lives         parties shelves       families halves        armies	Write a number under each sound (not letter) you hear in your words. e.g. c r o s s / e s 1 2 3 4 / 1 2	Convert the following measurements: a. 10cm = _____ mm b. 50cm = _____ mm c. 60mm = _____ cm d. 900mm = _____ cm	Find 4 things that are heat sources and draw them.
5	Circle the action verbs: drain        considered decorate    write        walked said pour         thought	<b>Plurals</b> duties        pianos countries    videos heroes       photos hooves       replies echoes       radios	Identify the base word for each of the plurals. e.g. pianos - piano	Estimate the capacity of the containers below:	Explain how 2 of your drawn suggestions get their heat.

Estimate the capacity of these containers.

