




Year 3 Homework – Term 3 – (Weeks 2-5)

Updated 14th July 2025


Remember to **READ EVERY NIGHT!** Practice your reading goal.

Week	English	Spelling		Mathematics	Science
2	Grammar Read the sentence and correct the grammar so it makes sense. <i>I finded my kitten hide under the kitchen table.</i>	Usual Past tense saw fed lost felt swam paid wore kept broke chose	Write the present tense of the spelling words e.g. Past – saw, present – see	Number the snakes from largest (1) to smallest (4). 	Draw and label the features of the sky that you can see when it's daytime.
3	Write a verb to complete the procedure sentences: 1. _____ the ingredients together. 2. _____ the cake in the oven. 3. _____ the oil from the tuna.	Unusual Past Tense froze knew said thought began taught heard bought found brought	Consonants and vowels Choose 5 words of your choice. For each word, write the C or V above each letter C – consonant, V – vowel	Order the mass of these objects from heaviest to lightest. 	Draw and list the features of the sky that you can see when it's night time.
4	Create nouns groups for the following nouns. 1. hair 2. dog 3. recipe	Plurals leaves thieves berries tomatoes lives parties shelves families halves armies	Write a number under each sound (not letter) you hear in your words. e.g. c r o s s / e s 1 2 3 4 / 1 2	Convert the following measurements: a. 10cm = _____ mm b. 50cm = _____ mm c. 60mm = _____ cm d. 900mm = _____ cm	Use a Venn diagram to describe how day and night are similar and different.
5	Circle the action verbs: drain considered write walked decorate said pour thought	Plurals duties pianos countries videos heroes photos hooves replies echoes radios	Identify the base word for each of the plurals. e.g. pianos - piano	Estimate the capacity of the containers below:	The Sun moves around the Earth. Is the above statement true or false? Explain your reasons using scientific language.

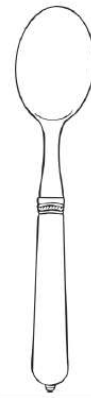
Estimate the capacity of these containers.



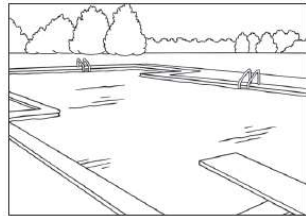
a)



b)



e)



c)



d)