






Year 3 Homework

Term 1 – (Week 6-10) Revised 2024

Remember to **READ EVERY NIGHT!** Practice your reading goal

Week	English	Spelling			Mathematics	Science				
6	<p><u>Retell</u> Write a retell of a story that you have read this week. Check your sentence punctuation.</p>	or oar male mail	whole hole weath er wheth er	our hour brea k brak e	<p><u>Homophones</u> Select 2 pairs of homophones and draw a picture of each to show their meaning.</p>	<p>Represent the numbers below as MAB.</p>  <p>a) 578 b) 412 c) 3 729 d) 1</p>	<p>List 10 items in your house that are non-living.</p> <p>Explain why 2 of them are non-living.</p>			
7	<p>Should students do chores at home? Write your opinion and 2 reasons that support it.</p>	gnat gnaw gnarl gnom e wrap	write wrote wrong wreck wrist	knot kno w knee knoc k knig ht	<p>Write 3 sentences and then make your sentences more detailed.</p>	<p>A spinner recorded the following</p> <table border="1" data-bbox="933 862 1173 929"> <tr> <td style="background-color: yellow;">5</td> <td style="background-color: red;">6</td> <td style="background-color: green;">1</td> </tr> </table> <p>Which colour occurred the most? Least? How many spins altogether?</p>	5	6	1	<p>List four observable features of a sloth.</p> 
5	6	1								
8	<p>Write three compound sentences using 3 different conjunctions. But, or, so, or and.</p>	found about boun ce how brow n	crowd clown plough pause saucer	Aug ust craw l stra w dra w taug ht	<p><u>Rhyming Words</u> Write a word that rhymes with 5 of your spelling words.</p>	<p>Sort these 3D shapes into ones that would roll and ones that would not. Cube, sphere, cone, triangular prism, cylinder</p>	<p>List 5 items that were once living and are now non-living.</p>			
9	<p>Write the text structure of a persuasive text (hint: OREO)</p>	isn't won't wasn't t were n't could n't	she's who's here's what's there's	we'd he'd it'd she'd d they 'd	<p>Write the spelling words without the contractions. e.g. wasn't = was not</p>	<p>Complete the following number sentences. Show your working out</p> <p>a) $34 + 21 = ?$ b) $84 - 32 = ?$ c) $95 + 34 = ?$</p>	<p>List four observable features of a koala.</p> 			
10	<p>Playing outside is better than playing video games. Write a persuasive text using OREO.</p>	lodge ledge fridge wedg e judge	bridge badge stage huge cage	page chan ge char ge oran ge villa ge	<p>Write each word in syllables, identify consonants and vowels and number the sounds in each syllable.</p>	<p>Write the value of the following</p> 